

Name

--	--	--	--	--	--	--	--	--	--	--	--	--	--	--	--	--	--	--	--

Roll No.

--	--	--	--	--	--	--	--

Father's Name

--	--	--	--	--	--	--	--	--	--	--	--	--	--	--	--	--	--	--	--

Centre No.

Marks

--	--	--	--

--	--	--

Write your email id .....

Date

--	--	--	--	--	--

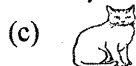
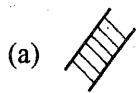
Time 3 Hrs.

Max.Marks : 100

**Note :** Students are required to fill in the boxes given at the last page against the correct answer given in (a), (b), (c), (d). For example (a) (b) (c) (d) marks (b) as the right answer. All questions carry equal marks.

--	--	--	--

1. Which is the tallest in the given picture :



(a) A ladder

(b) A baby

(c) A cat

(d) A coconut tree

2. Which number comes after 259:

(a) 258

(b) 300

(c) 260

(d) 310

3. Ali Picked 3 flowers. John picked 4 flowers. How many did they pick together ?



(a) 8

(b) 6

(c) 7

(d) 10

4. Which unit is used to measure a boys weight?

(a) Meter

(b) Kg

(c) Length

(d) Cm

5. At a birthday party Neeta ate 6 sweets. Rakesh ate 5. How many more Neeta eat ?

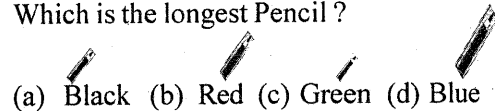
(a) 1

(b) 11

(c) 2

(d) 7

6. Which is the longest Pencil ?



(a) Black (b) Red (c) Green (d) Blue

7. What number comes between 98 and 100 ?

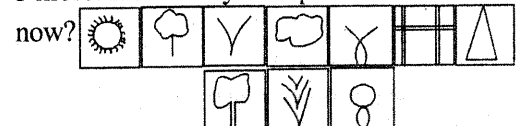
(a) 97

(b) 99

(c) 101

(d) 200

8. Madhav has 7 stamps. His mother gave him 3 more. How many stamps does he have now?



(a) 10

(b) 7

(c) 3

(d) 20

9. There were 17 flowers. A goat ate 1. How many left ?



(a) 15

(b) 16

(c) 18

(d) 20

10. Two tens and 5 ones = \_\_\_\_\_.

(a) 28

(b) 52

(c) 25

(d) 50

11. Geetha had 16 dolls. She gave 9 to poor children. How many dolls she have now :

- (a) 14 (b) 7  
(c) 25 (d) 8

12. What should be added to 6 to make 10 ?

- (a) 4 (b) 16  
(c) 8 (d) 10

13. Keshav is 8 years old. His father is 48 years old. By how many years is Keshav's father older than him ?

- (a) 56 (b) 25  
(c) 40 (d) 50

14. There are 67 seats in a bus. Only 4 are occupied. How many seats are empty ?

- (a) 65 (b) 71  
(c) 60 (d) 63

15. \_\_\_\_\_ comes between Wednesday and Friday.

- (a) Monday (b) Thursday  
(c) Saturday (d) Sunday

16. One year has \_\_\_\_\_ months.

- (a) 10 (b) 20  
(c) 12 (d) 4

17. Complete the series.



- (a) (b)   
(c) (d)



- (a)  $4 \times 2 = 8$  (b)  $2 \times 4 = 8$   
(c)  $8 \times 1 = 8$  (d)  $1 \times 8 = 8$

19. How many times the number 85 is written in the box :


- (a) 5  
(b) 6  
(c) 3  
(d) 4

85,	17,	15,	85
9,	11,	85,	5, 10
85,	1,	23,	85

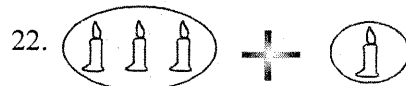
20. Which is the symbol for "equal to".

- (a) + (b) -  
(c) x (d) =

21. How many ice-creams are there in the box ?




- (a) 3 (b) 5  
(c) 7 (d) 8



- (a) 4 (b) 5  
(c) 6 (d) 2

23. Ravi picked 5 shells. Govind picked 3 shells. How many did they pick together ?



- (a) 8 (b) 10  
(c) 3 (d) 5

24. There were 7 apples on a tree Maya plucked 2. How many left ?

- (a) 5 (b) 9  
(c) 19 (d) 15

25. The number between 72 and 74 is \_\_\_\_\_.

- (a) 75 (b) 71  
(c) 73 (d) 80

26. Mina has 8 toys. Tina has 12 toys. How many more toys does Tina have ?

- (a) 20 (b) 4  
(c) 8 (d) 24

27. There are 34 girls and 22 boys in a class.  
How many more girls are there than boys?

- (a) 56 (b) 12  
(c) 30 (d) 34

28. April is the \_\_\_\_\_ month of the year.

- (a) 4 (b) 12  
(c) 10 (d) 5

29.  $6 \times 3 = \square$

- (a) 24 (b) 36  
(c) 18 (d) 60

30. Which is the odd one?

- (a) 10 (b) 27  
(c) 16 (d) 24

31. How many fishes are there in the pond?



- (a) 5 (b) 3  
(c) 10 (d) 8

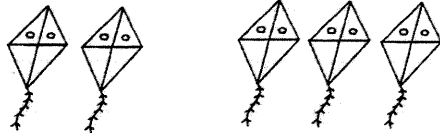
32. An apple costs Rs. 10. Two apples will cost \_\_\_\_\_.

- (a) 10  
(b)  $10 + 10$   
(c)  $10 + 10 + 10$   
(d)  $10 + 10 + 10 + 10$

33. Guess me! I am round. I have no sides :

- (a) Triangle (b) Circle  
(c) Rectangle (d) Square

34.  $5 - 5 = \square$



- (a) 5 (b) 10  
(c) 0 (d) 15

35. There are 12 bananas and 6 oranges in a basket. How many fruits are there in the basket?

- (a) 20 (b) 18  
(c) 15 (d) 24

36.  $64 + 3 = \square$

- (a) 65 (b) 70  
(c) 67 (d) 64

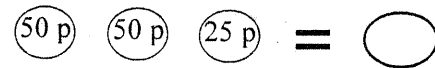
37.  $49 = \square$  Tens + 9 ones.

- (a) 4 (b) 40  
(c) 90 (d) 9

38. \_\_\_\_\_ Month is between June and August.

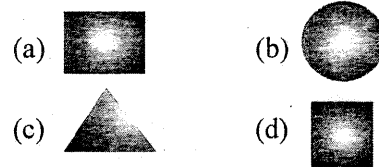
- (a) July (b) January  
(c) April (d) December

39. What is the total value of the coin?



- (a) Rs. 2 (b) Rs. 5  
(c) Rs. 1.25 (d) Rs 2.5

40. Which shape has curved lines?



41. Which has more ;



- (a) Balls (b) Keys  
(c) Ice-creams (d) Stars

42.  $315 + 5 = \square$

- (a) 310 (b) 320  
(c) 350 (d) 360

43. How many ones are there in the number 98 ?  
 (a) 98 (b) 8  
 (c) 17 (d) 1

44. The balloon seller had 8 balloons. He sold 7.  
 How many are left ?




- (a) 1 (b) 2  
 (c) 3 (d) 4

45. Varun invited 11 boys and 8 girls to his birth  
 day party. How many children did he invite  
 in all ?  
 (a) 19 (b) 15  
 (c) 20 (d) 25

46.  $90 + 0 = \square$   
 (a) 91 (b) 90  
 (c) 95 (d) 100

47. There are 56 children in a class; 23 are boys.  
 How many girls are there ?  
 (a) 79 (b) 85  
 (c) 23 (d) 33

48. The shape of the stamp is \_\_\_\_\_.



- (a) Circle (b) Square  
 (c) Rhombus (d) Rectangle

49. If 1 bird has 2 legs. How many legs do 5 birds  
 have ?  
 (a) 12 (b) 5  
 (c) 10 (d) 15

50. 200 paise is equal to \_\_\_\_\_.  
 (a) Rs. 5 (b) Rs. 200  
 (c) Rs. 2 (d) Rs. 20

12 ANSWER BLOCK - 01				
1. <input type="text"/>	11. <input type="text"/>	21. <input type="text"/>	31. <input type="text"/>	41. <input type="text"/>
2. <input type="text"/>	12. <input type="text"/>	22. <input type="text"/>	32. <input type="text"/>	42. <input type="text"/>
3. <input type="text"/>	13. <input type="text"/>	23. <input type="text"/>	33. <input type="text"/>	43. <input type="text"/>
4. <input type="text"/>	14. <input type="text"/>	24. <input type="text"/>	34. <input type="text"/>	44. <input type="text"/>
5. <input type="text"/>	15. <input type="text"/>	25. <input type="text"/>	35. <input type="text"/>	45. <input type="text"/>
6. <input type="text"/>	16. <input type="text"/>	26. <input type="text"/>	36. <input type="text"/>	46. <input type="text"/>
7. <input type="text"/>	17. <input type="text"/>	27. <input type="text"/>	37. <input type="text"/>	47. <input type="text"/>
8. <input type="text"/>	18. <input type="text"/>	28. <input type="text"/>	38. <input type="text"/>	48. <input type="text"/>
9. <input type="text"/>	19. <input type="text"/>	29. <input type="text"/>	39. <input type="text"/>	49. <input type="text"/>
10. <input type="text"/>	20. <input type="text"/>	30. <input type="text"/>	40. <input type="text"/>	50. <input type="text"/>