

11. In descending order arrange numbers from
 (a) Left to right
 (b) Right to left
 (c) Big to small
 (d) Small to big

12. Choose the correct sign: $36 \square 4 = 32$.
 (a) - (b) +
 (c) = (d) >

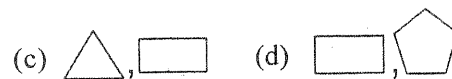
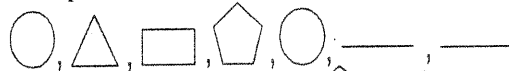
13. Find out the correct number for Two Hundred and Seven.
 (a) 27 (b) 207
 (c) 270 (d) 720

14. The total seats in a theatre is 106. In a show only 6 seats are empty. How many seats are occupied by people?
 (a) 96 (b) 106
 (c) 100 (d) 99

15. How many bananas are there in 3 dozens?
 (a) 6 (b) 24
 (c) 12 (d) 36

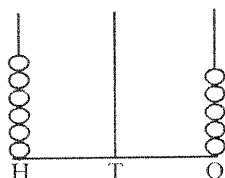
16. How many months have 30 days?
 (a) 6 (b) 4 (c) 7 (d) 2

17. Complete the series.



18. Number shown by abacus is:

- (a) 560
 (b) 650
 (c) 506
 (d) 605



19. How many times the number 62 is written in the box?

- (a) 6
 (b) 4
 (c) 5
 (d) 7

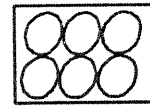
62	64	62	68
64	62	60	62
66	36	62	63

20. Which is the symbol for Equal?

- (a) + (b) -
 (c) × (d) =

21. How many eggs are there in the box?

- (a) 3/4 dozen
 (b) 1/2 dozen
 (c) 7
 (d) 8



22. Tick the numbers in ascending order.

- (a) 27, 30, 28, 17
 (b) 21, 26, 30, 34
 (c) 16, 27, 10, 12
 (d) 2, 12, 8, 11

23. How many sevens will make 42?

- (a) 5 (b) 6
 (c) 7 (d) 4

24. If 0 is added to 70, we will get:

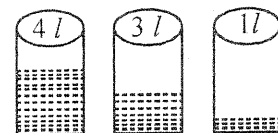
- (a) 70 (b) 71
 (c) 1 (d) 0

25. 4 tens - 7 ones is:

- (a) 43 (b) 33
 (c) 23 (d) 13

26. How much water is in the three bottles?

- (a) 10 lt
 (b) 8 lt
 (c) 7 lt
 (d) 4 lt

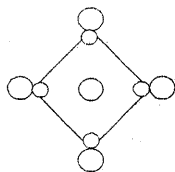


27. Which of the following is correct?
 (a) $16 = 10 + 3 + 4$ (b) $16 = 8 + 2 + 5$
 (c) $16 = 8 + 0 + 8$ (d) $16 = 8 + 8 + 8$

28. Which of the following are equal?
 (a) 1 kg.rice and 1 kg.sugar
 (b) 1 kg.cotton and 2000 g iron
 (c) 2 kg.wheat and 1000 g sugar
 (d) 250 g tea powder and 500 g sugar

29. The No.of circles in this picture are:

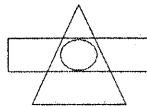
- (a) 6
 (b) 10
 (c) 8
 (d) 9



30. Fill in the series: 100, 97, 94, 91, -----, -----.
 (a) 99, 94 (b) 88, 85
 (c) 93, 90 (d) 92, 89

31. How many shapes are in the picture?

- (a) 4 (b) 3
 (c) 5 (d) 2







32. An orange costs Rs. 2.50. 1/4 dozen oranges will cost:

- (a) Rs.7.05 (b) Rs.6.50
 (c) Rs.7.50 (d) Rs.8.50

33. I have no corner and I am like a ball.

Who am I?

- (a)  (b) 
 (c)  (d) 

34. What portion of the circle is shaded?

- (a) $\frac{4}{4}$
 (b) $\frac{2}{4}$
 (c) $\frac{3}{4}$
 (d) $\frac{1}{4}$



35. There are 1/2 dozen bananas, 6 mangoes, 6 apples and 2 water melons in a basket. How many fruits are there in the basket ?

- (a) 20 (b) 18
 (c) 28 (d) 26

36. 6 less than 12 is written as:

- (a) $6 > 12$ (b) $6 < 12$
 (c) $6 = 12$ (d) $6 + 12$

37. $71 = \square$ Tens + \square ones.

- (a) 1, 7 (b) 7, 1
 (c) 70 (d) 10

38. Skip counting by 3, which number will not come?





- (a) 21 (b) 33
 (c) 41 (d) 51

39. What is the total value of the coins below?

$Rs.5 + Rs.10 + Rs.2 + 50 p =$

- (a) Rs. 17 (b) Rs.17.50
 (c) Rs. 16.50 (d) Rs 16

40. Which shape has curved lines ?

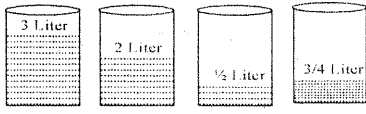

- (a)  (b) 
 (c)  (d) 

41. Radha has 6 bundles of pencils with her. Each bundle has 3 pencils. What is the total number of pencils with Radha?

- (a) 12 (b) 18
 (c) 24 (d) 10

42. $30 + 30 + 30 =$

- (a) 30×3 (b) $30 - 30 - 30$
 (c) 900 (d) 120

43. How many zeroes are there from 1 to 10?
 (a) 10 (b) 9
 (c) No (d) 1
44. A farmer had 2 hens and a dozen chickens with him. Total number of hens with the farmer is:
 (a) 10 (b) 12
 (c) 14 (d) 13
45. Which can contains more oil?
 (a) 2 lt
 (b) 3 lt
 (c) 1/2 lt
 (d) 3/4 lt
- 
46. $100 - 0 =$
 (a) 99 (b) 100
 (c) 101 (d) 98
47. When we add 6 to another number we get the smallest number of two digits. What is that number?
 (a) 5 (b) 6
 (c) 14 (d) 4
48. The shape of an  is _____.
 (a) Circle
 (b) Square
 (c) Rhombus
 (d) Cone
49. How many socks are there in 7 pairs?
 (a) 7 (b) 12
 (c) 14 (d) 16
50. 300 paise is equal to _____.
 (a) Rs.30 (b) Rs. 300
 (c) Rs. 3 (d) Rs. 30

12 ANSWER BLOCK - 01				
1. <input type="text"/>	2. <input type="text"/>	3. <input type="text"/>	4. <input type="text"/>	5. <input type="text"/>
6. <input type="text"/>	7. <input type="text"/>	8. <input type="text"/>	9. <input type="text"/>	10. <input type="text"/>
11. <input type="text"/>	12. <input type="text"/>	13. <input type="text"/>	14. <input type="text"/>	15. <input type="text"/>
16. <input type="text"/>	17. <input type="text"/>	18. <input type="text"/>	19. <input type="text"/>	20. <input type="text"/>
21. <input type="text"/>	22. <input type="text"/>	23. <input type="text"/>	24. <input type="text"/>	25. <input type="text"/>
26. <input type="text"/>	27. <input type="text"/>	28. <input type="text"/>	29. <input type="text"/>	30. <input type="text"/>
31. <input type="text"/>	32. <input type="text"/>	33. <input type="text"/>	34. <input type="text"/>	35. <input type="text"/>
36. <input type="text"/>	37. <input type="text"/>	38. <input type="text"/>	39. <input type="text"/>	40. <input type="text"/>
41. <input type="text"/>	42. <input type="text"/>	43. <input type="text"/>	44. <input type="text"/>	45. <input type="text"/>
46. <input type="text"/>	47. <input type="text"/>	48. <input type="text"/>	49. <input type="text"/>	50. <input type="text"/>